



NAME _____

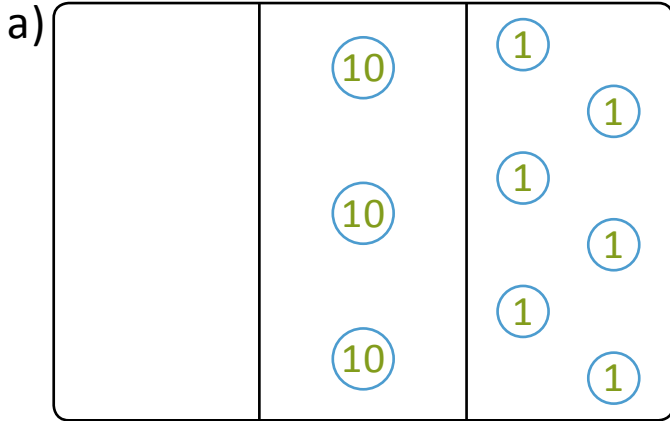
DATE _____

FINDING NUMBERS BY CONVERSION

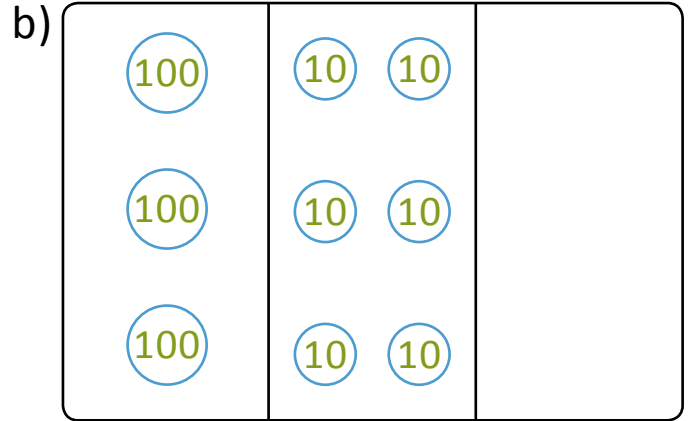
Conversion of ones into tens and tens into hundreds by using place value charts.

Example:

i) Tell the value of the following numbers.



a) 36



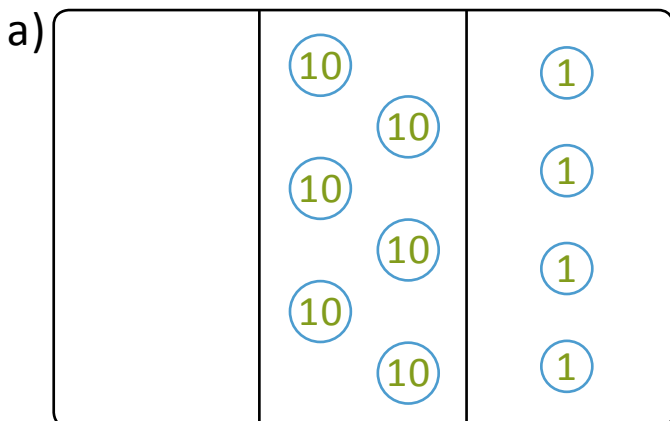
b) 360

ii) Fill in the sentences below to tell about the change from 36 to 360.

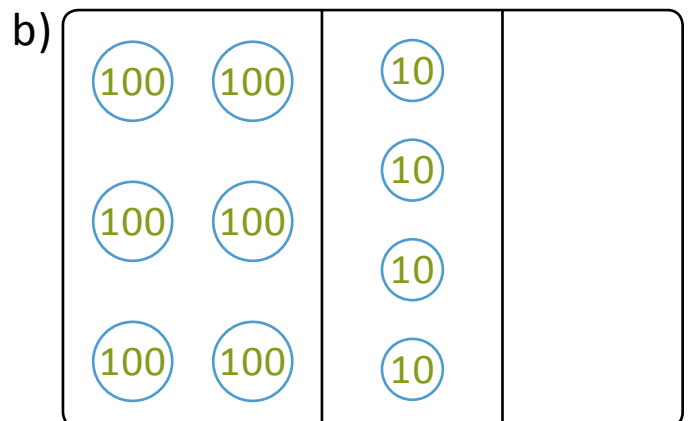
I changed 6 ones to 6 tens.

I changed 3 tens to 3 hundreds.

1) i) Tell the value of the following numbers.



a) _____



b) _____

ii) Fill in the sentences below to tell about the change from 64 to 640.

I changed _____ to _____.

I changed _____ to _____.